

4.

Start Time



End Time



Elapsed Time?

5.

Start Time




End Time




Elapsed Time?

6.

Start Time



End Time



Elapsed Time?

ANSWER KEY

4.

Start Time



End Time



Elapsed Time?

10:26

5.

Start Time



End Time



Elapsed Time?


2:58

6.

Start Time



End Time



Elapsed Time?

1:18