


1. Start Time



End Time



Elapsed Time?

2. Start Time




End Time



Elapsed Time?

3. Start Time



End Time




Elapsed Time?

# ANSWER KEY

1.

Start Time



End Time



Elapsed Time?

**4:38**

2.

Start Time



End Time



Elapsed Time?

**6:13**

3.

Start Time



End Time



Elapsed Time?

**5:25**