


Name: _____ Date: _____

1. Start Time



Elapsed Time

2:39

End Time?

2. Start Time




Elapsed Time

7:01

End Time?

3. Start Time



Elapsed Time

8:46

End Time?

ANSWER KEY

1. Start Time



Elapsed Time

2:39

End Time?

10:09

2. Start Time




Elapsed Time

7:01

End Time?

6:35

3. Start Time



Elapsed Time

8:46

End Time?

7:08