

1. Start Time



Elapsed Time

6:00

End Time?

2. Start Time




Elapsed Time

3:40

End Time?

3. Start Time




Elapsed Time

0:20

End Time?

ANSWER KEY

1. Start Time



Elapsed Time

6:00

End Time?

9:40

2. Start Time




Elapsed Time

3:40

End Time?

10:20

3. Start Time



Elapsed Time

0:20

End Time?

10:20