

4. Start Time




Elapsed Time

2:45

End Time?

5. Start Time




Elapsed Time

6:00

End Time?

6. Start Time



Elapsed Time

0:45

End Time?

ANSWER KEY

4. Start Time




Elapsed Time

2:45

End Time?

9:45

5. Start Time



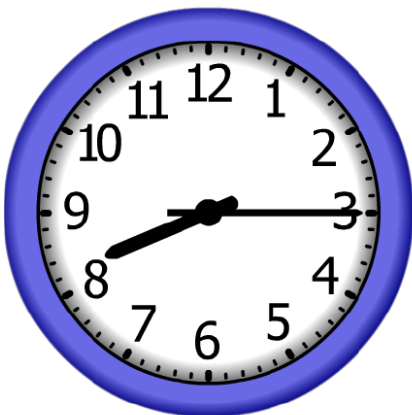
Elapsed Time

6:00

End Time?

2:45

6. Start Time



Elapsed Time

0:45

End Time?

9:00