


4. Start Time

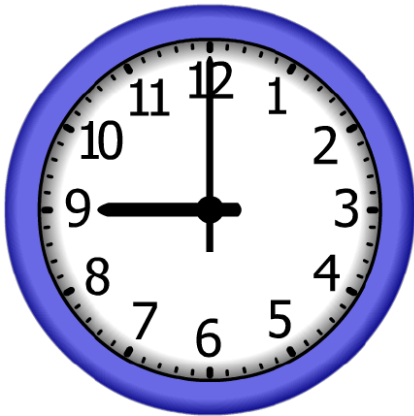


Elapsed Time

**1:45**

End Time?

5. Start Time




Elapsed Time

**0:30**

End Time?

6. Start Time



Elapsed Time

**6:15**

End Time?

# ANSWER KEY

4. Start Time



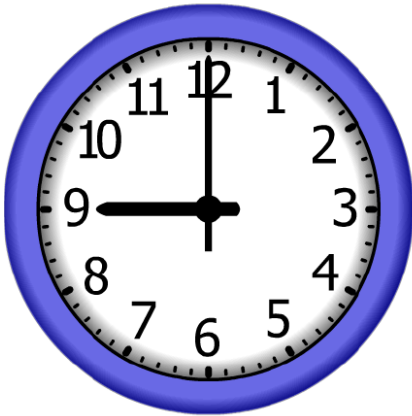
Elapsed Time

**1:45**

End Time?

**10:00**

5. Start Time




Elapsed Time

**0:30**

End Time?

**9:30**

6. Start Time



Elapsed Time

**6:15**

End Time?

**5:15**