

Name: _____ Date: _____

1. Start Time

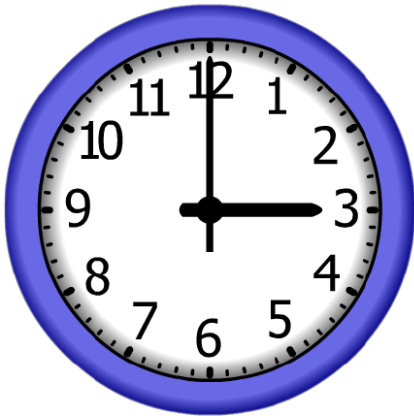


Elapsed Time

0:30

End Time?

2. Start Time

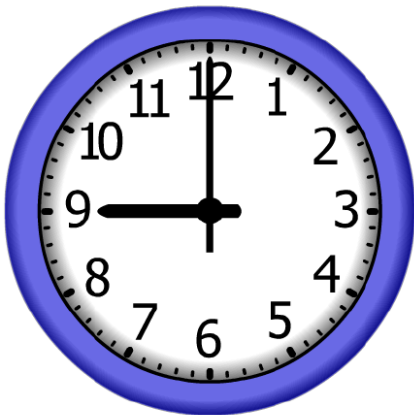


Elapsed Time

6:30

End Time?

3. Start Time



Elapsed Time

1:30

End Time?

ANSWER KEY

1. Start Time



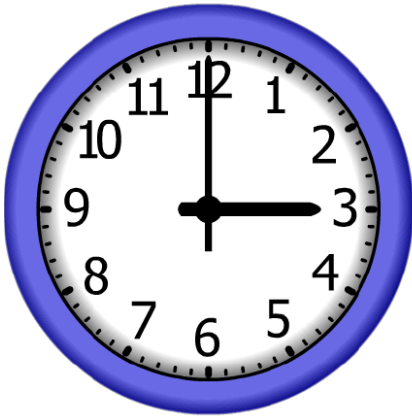
Elapsed Time

0:30

End Time?

7:00

2. Start Time



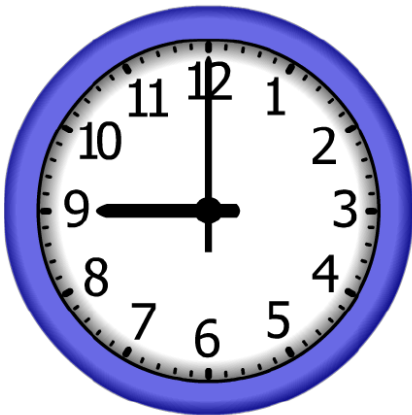
Elapsed Time

6:30

End Time?

9:30

3. Start Time



Elapsed Time

1:30

End Time?

10:30