


4. Start Time




Elapsed Time

5:15

End Time?

5. Start Time



Elapsed Time

4:25

End Time?

6. Start Time




Elapsed Time

6:50

End Time?

ANSWER KEY

4. Start Time




Elapsed Time

5:15

End Time?

5:15

5. Start Time



Elapsed Time

4:25

End Time?

11:25

6. Start Time



Elapsed Time

6:50

End Time?

12:15