

Name: _____ Date: _____

1.

Start Time?

Elapsed Time

End Time

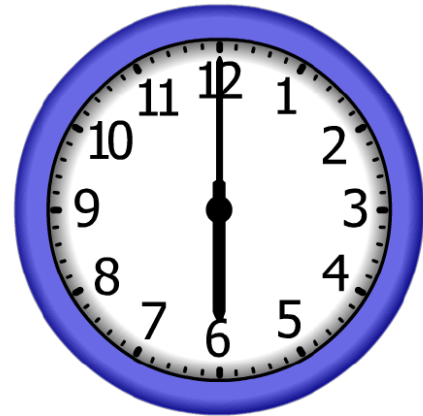


2.

Start Time?

Elapsed Time

End Time




3.

Start Time?

Elapsed Time

End Time



ANSWER KEY

1.

Start Time?

4:00

Elapsed Time

9:00

End Time



2.

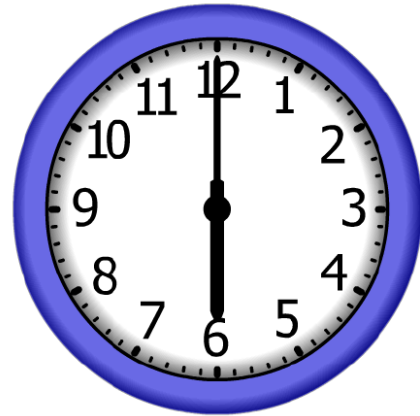
Start Time?

5:00

Elapsed Time

1:00

End Time



3.

Start Time?

11:00

Elapsed Time

5:00

End Time

