


4.

Start Time?

Elapsed Time

End Time



5.

Start Time?

Elapsed Time

End Time

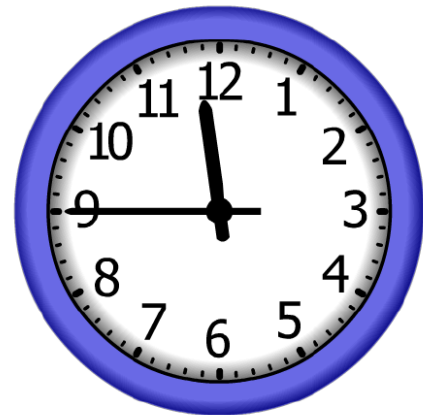


6.

Start Time?

Elapsed Time

End Time



ANSWER KEY

4.


Start Time?

11:30

Elapsed Time

6:30

End Time



5.

Start Time?

4:45

Elapsed Time

3:00

End Time



6.

Start Time?

10:00

Elapsed Time

1:45

End Time

