

4.

Start Time?

Elapsed Time

End Time




5.

Start Time?

Elapsed Time

End Time



6.

Start Time?

Elapsed Time

End Time



ANSWER KEY

4.


Start Time?

12:15

Elapsed Time

7:00

End Time



5.


Start Time?

8:00

Elapsed Time

1:45

End Time



6.

Start Time?

11:30

Elapsed Time

1:30

End Time

