


4.

Start Time?

Elapsed Time

End Time



5.

Start Time?

Elapsed Time

End Time



6.

Start Time?

Elapsed Time

End Time



ANSWER KEY

4.


Start Time?

11:00

Elapsed Time

6:45

End Time



5.


Start Time?

10:30

Elapsed Time

6:00

End Time



6.

Start Time?

7:30

Elapsed Time

6:45

End Time

