


Name: _____ Date: _____

1.

Start Time?

Elapsed Time

End Time




2.

Start Time?

Elapsed Time

End Time




3.

Start Time?

Elapsed Time

End Time



ANSWER KEY

1.

Start Time?

3:00

Elapsed Time

5:30

End Time



2.

Start Time?

8:00

Elapsed Time

3:00

End Time



3.

Start Time?

5:30

Elapsed Time

7:00

End Time

