

Name: _____ Date: _____

1.

Start Time?

Elapsed Time

11:35

End Time



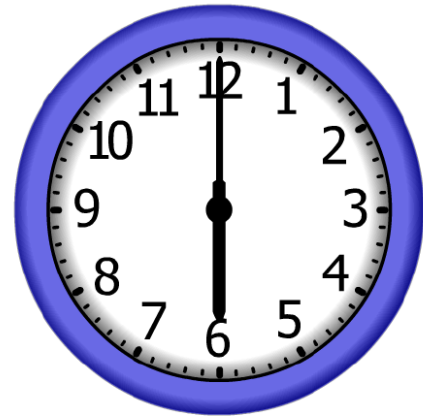
2.

Start Time?

Elapsed Time

6:00

End Time




3.

Start Time?

Elapsed Time

4:25

End Time



ANSWER KEY

1.

Start Time?

5:45

Elapsed Time

11:35

End Time



2.

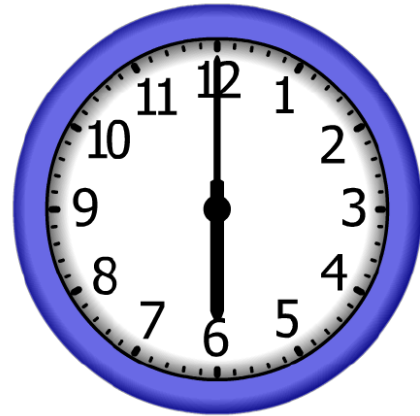
Start Time?

12:00

Elapsed Time

6:00

End Time



3.

Start Time?

2:20

Elapsed Time

4:25

End Time

