


4.

Start Time?

Elapsed Time

**2:05**

End Time



5.

Start Time?

Elapsed Time

**4:35**

End Time




6.

Start Time?

Elapsed Time

**0:45**

End Time



# ANSWER KEY

4.


Start Time?

**9:40**

Elapsed Time

**2:05**

End Time



5.

Start Time?

**1:15**

Elapsed Time

**4:35**

End Time



6.

Start Time?

**9:35**

Elapsed Time

**0:45**

End Time

