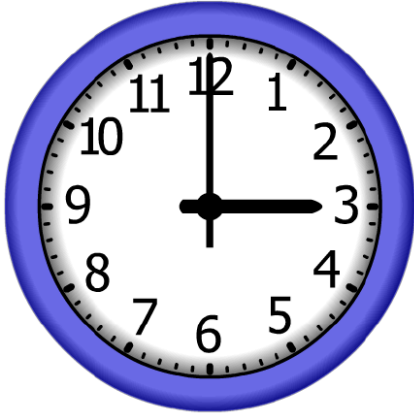


4. Start Time




Elapsed Time

**3:00**

End Time?

5. Start Time




Elapsed Time

**3:00**

End Time?

6. Start Time




Elapsed Time

**10:00**

End Time?

# ANSWER KEY

4. Start Time




Elapsed Time

**3:00**

End Time?

**6:00**

5. Start Time



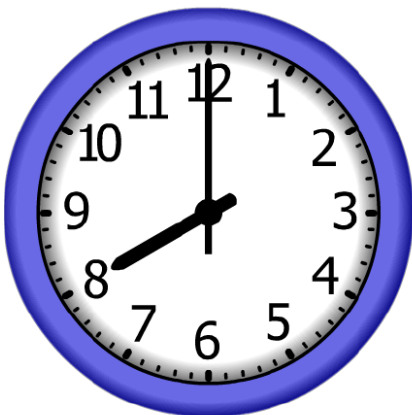
Elapsed Time

**3:00**

End Time?

**3:00**

6. Start Time



Elapsed Time

**10:00**

End Time?

**6:00**