


1. Start Time



Elapsed Time

4:22

End Time?

2. Start Time




Elapsed Time

6:25

End Time?

3. Start Time




Elapsed Time

6:40

End Time?

ANSWER KEY

1. Start Time




Elapsed Time

4:22

End Time?

2:43

2. Start Time




Elapsed Time

6:25

End Time?

7:05

3. Start Time



Elapsed Time

6:40

End Time?

8:11