

Name: _____ Date: _____

1. Start Time




Elapsed Time

4:50

End Time?

2. Start Time



Elapsed Time

6:00

End Time?

3. Start Time



Elapsed Time

0:20

End Time?

ANSWER KEY

1. Start Time




Elapsed Time

4:50

End Time?

2:20

2. Start Time




Elapsed Time

6:00

End Time?

6:00

3. Start Time



Elapsed Time

0:20

End Time?

3:40