


4. Start Time

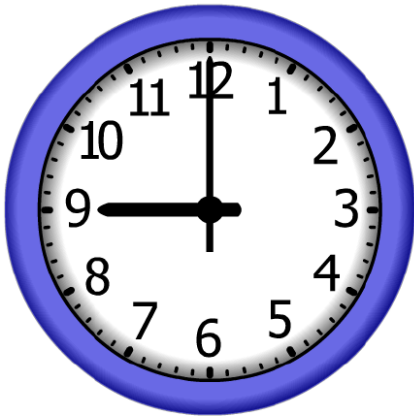


Elapsed Time

7:15

End Time?

5. Start Time



Elapsed Time

11:30

End Time?

6. Start Time



Elapsed Time

11:45

End Time?

ANSWER KEY

4. Start Time



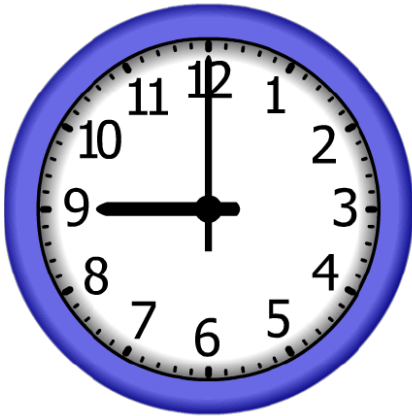
Elapsed Time

7:15

End Time?

10:30

5. Start Time




Elapsed Time

11:30

End Time?

8:30

6. Start Time



Elapsed Time

11:45

End Time?

2:00