

Name: _____ Date: _____

1. Start Time




Elapsed Time

2:30

End Time?

2. Start Time




Elapsed Time

1:00

End Time?

3. Start Time



Elapsed Time

11:00

End Time?

ANSWER KEY

1. Start Time




Elapsed Time

2:30

End Time?

9:00

2. Start Time




Elapsed Time

1:00

End Time?

9:00

3. Start Time



Elapsed Time

11:00

End Time?

12:00