

Name: _____ Date: _____

1.

Start Time?

Elapsed Time

End Time




2.

Start Time?

Elapsed Time

End Time




3.

Start Time?

Elapsed Time

End Time



ANSWER KEY

1.


Start Time?

12:15

Elapsed Time

6:30

End Time



2.


Start Time?

5:15

Elapsed Time

1:00

End Time



3.

Start Time?

10:00

Elapsed Time

7:45

End Time

