


4.

Start Time?

Elapsed Time

End Time



5.

Start Time?

Elapsed Time

End Time




6.

Start Time?

Elapsed Time

End Time



ANSWER KEY

4.


Start Time?

7:45

Elapsed Time

6:45

End Time



5.

Start Time?

1:00

Elapsed Time

9:00

End Time



6.

Start Time?

1:00

Elapsed Time

2:45

End Time

