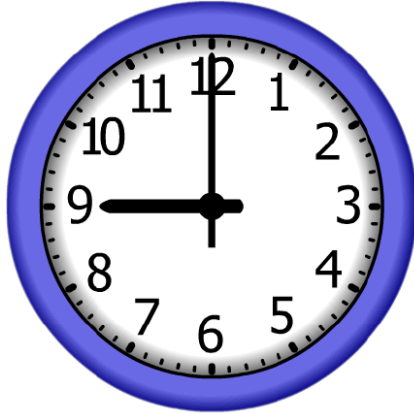


4. Start Time



End Time



Elapsed Time?

5. Start Time



End Time



Elapsed Time?

6. Start Time



End Time




Elapsed Time?

# ANSWER KEY

4.

Start Time



End Time



Elapsed Time?

**7:40**

5.

Start Time



End Time




Elapsed Time?

**0:30**

6.

Start Time



End Time



Elapsed Time?

**7:20**