


1. Start Time

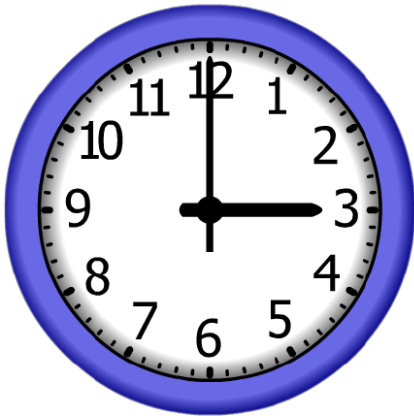


Elapsed Time

**9:00**

End Time?

2. Start Time

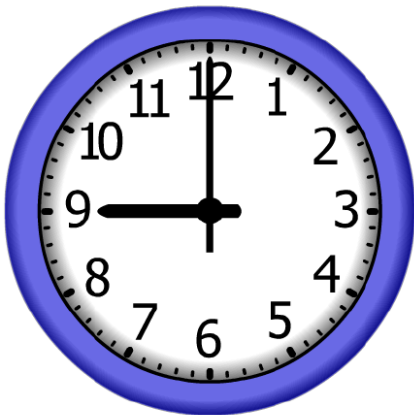


Elapsed Time

**1:00**

End Time?

3. Start Time



Elapsed Time

**4:00**

End Time?

# ANSWER KEY

1. Start Time



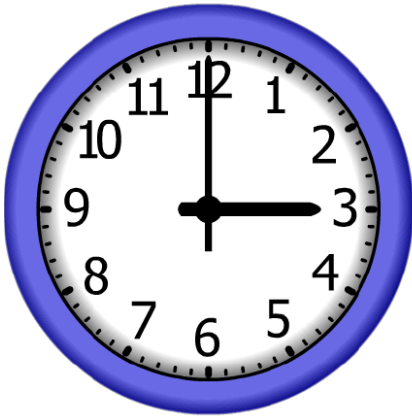
Elapsed Time

9:00

End Time?

7:00

2. Start Time



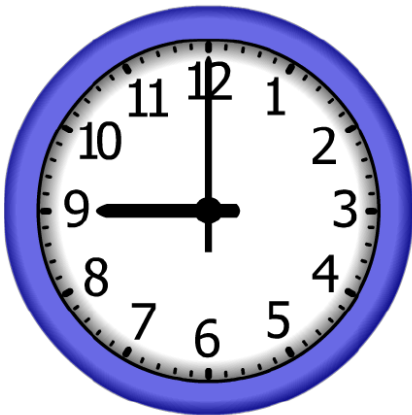
Elapsed Time

1:00

End Time?

4:00

3. Start Time



Elapsed Time

4:00

End Time?

1:00