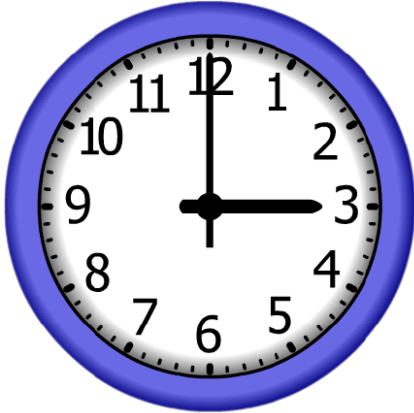


Name: _____ Date: _____

1. Start Time

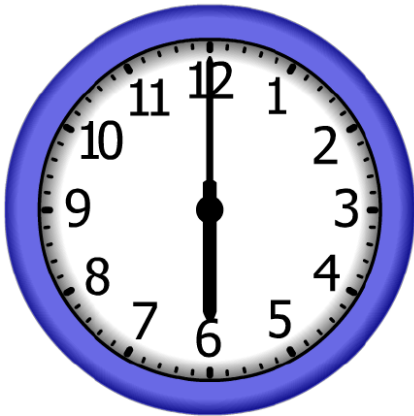


Elapsed Time

5:00

End Time?

2. Start Time



Elapsed Time

3:00

End Time?

3. Start Time




Elapsed Time

1:00

End Time?

ANSWER KEY

1. Start Time



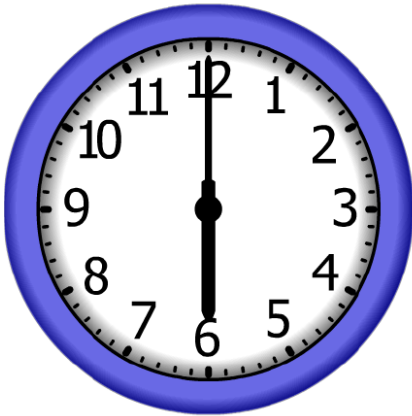
Elapsed Time

5:00

End Time?

8:00

2. Start Time



Elapsed Time

3:00

End Time?

9:00

3. Start Time



Elapsed Time

1:00

End Time?

2:00