

1. Start Time



Elapsed Time

**8:47**

End Time?

2. Start Time




Elapsed Time

**9:56**

End Time?

3. Start Time




Elapsed Time

**9:11**

End Time?

# ANSWER KEY

1. Start Time



Elapsed Time

**8:47**

End Time?

**5:41**

2. Start Time



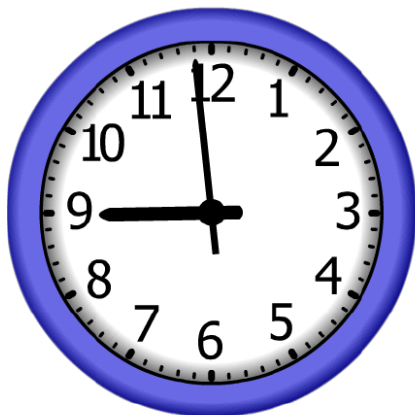
Elapsed Time

**9:56**

End Time?

**12:03**

3. Start Time



Elapsed Time

**9:11**

End Time?

**6:10**