


4. Start Time

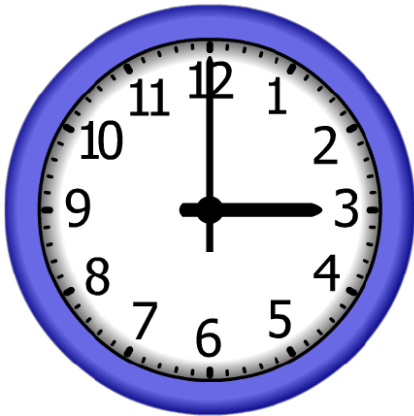


Elapsed Time

**5:10**

End Time?

5. Start Time



Elapsed Time

**3:10**

End Time?

6. Start Time



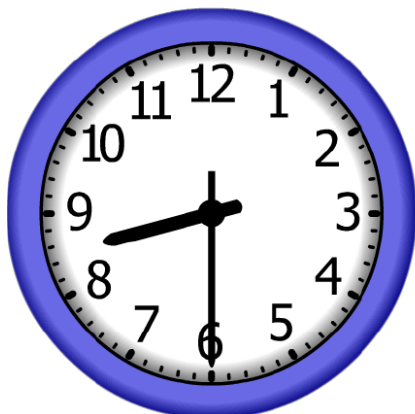
Elapsed Time

**5:30**

End Time?

# ANSWER KEY

4. Start Time



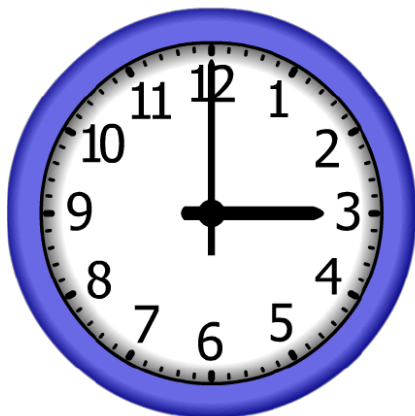
Elapsed Time

**5:10**

End Time?

**1:40**

5. Start Time




Elapsed Time

**3:10**

End Time?

**6:10**

6. Start Time



Elapsed Time

**5:30**

End Time?

**4:30**