


Name: _____ Date: _____

1. Start Time




Elapsed Time

3:30

End Time?

2. Start Time




Elapsed Time

4:30

End Time?

3. Start Time



Elapsed Time

3:45

End Time?

ANSWER KEY

1. Start Time




Elapsed Time

3:30

End Time?

3:15

2. Start Time




Elapsed Time

4:30

End Time?

4:00

3. Start Time



Elapsed Time

3:45

End Time?

4:30