

Name: _____ Date: _____

1. Start Time




Elapsed Time

4:15

End Time?

2. Start Time




Elapsed Time

4:45

End Time?

3. Start Time



Elapsed Time

8:30

End Time?

ANSWER KEY

1. Start Time




Elapsed Time

4:15

End Time?

11:15

2. Start Time




Elapsed Time

4:45

End Time?

2:15

3. Start Time



Elapsed Time

8:30

End Time?

12:30