

Name: _____ Date: _____

1. Start Time




Elapsed Time

2:30

End Time?

2. Start Time



Elapsed Time

9:00

End Time?

3. Start Time



Elapsed Time

7:00

End Time?

ANSWER KEY

1. Start Time




Elapsed Time

2:30

End Time?

3:30

2. Start Time




Elapsed Time

9:00

End Time?

10:30

3. Start Time



Elapsed Time

7:00

End Time?

11:30