

1. Start Time




Elapsed Time

0:30

End Time?

2. Start Time




Elapsed Time

2:00

End Time?

3. Start Time



Elapsed Time

6:30

End Time?

ANSWER KEY

1. Start Time



Elapsed Time

0:30

End Time?

7:30

2. Start Time




Elapsed Time

2:00

End Time?

5:30

3. Start Time



Elapsed Time

6:30

End Time?

8:00