

4. Start Time




Elapsed Time

2:30

End Time?

5. Start Time




Elapsed Time

9:30

End Time?

6. Start Time



Elapsed Time

2:00

End Time?

ANSWER KEY

4. Start Time




Elapsed Time

2:30

End Time?

8:00

5. Start Time




Elapsed Time

9:30

End Time?

10:00

6. Start Time



Elapsed Time

2:00

End Time?

3:00