

4.

Start Time?

Elapsed Time

End Time




5.

Start Time?

Elapsed Time

End Time




6.

Start Time?

Elapsed Time

End Time



ANSWER KEY

4.


Start Time?

2:10

Elapsed Time

4:50

End Time



5.

Start Time?

5:40

Elapsed Time

9:00

End Time



6.

Start Time?

3:40

Elapsed Time

8:20

End Time

