


Name: _____ Date: _____

1.

Start Time?

Elapsed Time

End Time



2.

Start Time?

Elapsed Time

End Time




3.

Start Time?

Elapsed Time

End Time



ANSWER KEY

1.

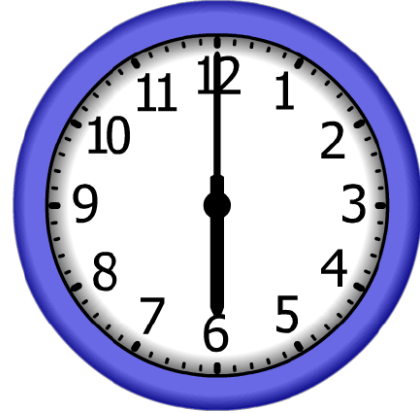
Start Time?

10:00

Elapsed Time

8:00

End Time



2.

Start Time?

4:40

Elapsed Time

9:30

End Time



3.

Start Time?

10:40

Elapsed Time

0:50

End Time

