


4.

Start Time?

Elapsed Time

End Time




5.

Start Time?

Elapsed Time

End Time

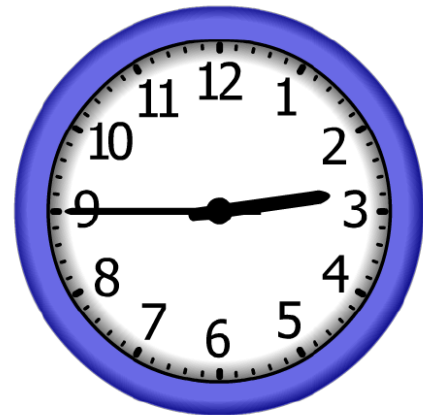


6.

Start Time?

Elapsed Time

End Time



# ANSWER KEY

4.


Start Time?

**9:15**

Elapsed Time

**9:00**

End Time



5.


Start Time?

**11:00**

Elapsed Time

**8:30**

End Time



6.

Start Time?

**1:45**

Elapsed Time

**1:00**

End Time

