


4.

Start Time?

Elapsed Time

End Time




5.

Start Time?

Elapsed Time

End Time

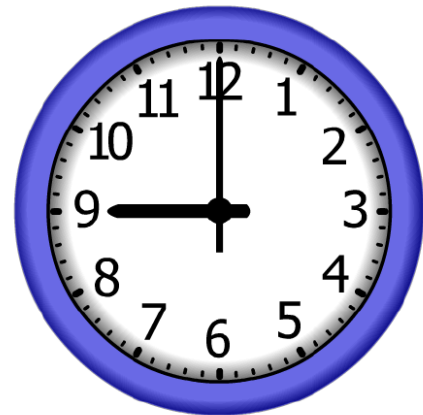


6.

Start Time?

Elapsed Time

End Time



ANSWER KEY

4.

Start Time?

9:00

Elapsed Time

10:00

End Time



5.


Start Time?

2:00

Elapsed Time

8:30

End Time



6.

Start Time?

7:00

Elapsed Time

2:00

End Time

