


4.

Start Time?

Elapsed Time

End Time



5.

Start Time?

Elapsed Time

End Time




6.

Start Time?

Elapsed Time

End Time



ANSWER KEY

4.


Start Time?

6:00

Elapsed Time

7:30

End Time



5.

Start Time?

10:30

Elapsed Time

2:30

End Time



6.

Start Time?

10:30

Elapsed Time

4:00

End Time

