


Name: _____ Date: _____

1.

Start Time?

Elapsed Time

End Time




2.

Start Time?

Elapsed Time

End Time



3.

Start Time?

Elapsed Time

End Time



ANSWER KEY

1.


Start Time?

7:15

Elapsed Time

1:40

End Time



2.

Start Time?

11:10

Elapsed Time

2:15

End Time



3.

Start Time?

7:30

Elapsed Time

3:30

End Time

