


Name: _____ Date: _____

1.

Start Time?

Elapsed Time

End Time




2.

Start Time?

Elapsed Time

End Time



3.

Start Time?

Elapsed Time

End Time



ANSWER KEY

1.

Start Time?

12:50

Elapsed Time

1:05

End Time



2.


Start Time?

8:05

Elapsed Time

3:25

End Time



3.

Start Time?

1:50

Elapsed Time

8:00

End Time

