


4.

Start Time



End Time



Elapsed Time?

5.

Start Time




End Time



Elapsed Time?

6.

Start Time



End Time



Elapsed Time?


ANSWER KEY

4.

Start Time



End Time



Elapsed Time?

9:50

5.

Start Time



End Time



Elapsed Time?


5:40

6.

Start Time



End Time



Elapsed Time?

0:20