


1. Start Time




End Time



Elapsed Time?

2. Start Time



End Time



Elapsed Time?

3. Start Time



End Time



Elapsed Time?

# ANSWER KEY

1.

Start Time



End Time




Elapsed Time?

**11:40**

2.

Start Time



End Time



Elapsed Time?

**3:40**

3.

Start Time



End Time



Elapsed Time?

**10:40**