

4. Start Time



End Time



Elapsed Time?

5. Start Time



End Time




Elapsed Time?

6. Start Time



End Time



Elapsed Time?


ANSWER KEY

4.

Start Time



End Time



Elapsed Time?

10:35

5.

Start Time



End Time




Elapsed Time?


8:15

6.

Start Time



End Time



Elapsed Time?

8:20