


4.

Start Time?

Elapsed Time

7:00

End Time




5.

Start Time?

Elapsed Time

8:30

End Time




6.

Start Time?

Elapsed Time

4:10

End Time



ANSWER KEY

4.


Start Time?

7:30

Elapsed Time

7:00

End Time



5.


Start Time?

11:30

Elapsed Time

8:30

End Time



6.

Start Time?

7:40

Elapsed Time

4:10

End Time

