

4.

Start Time?

Elapsed Time

End Time




5.

Start Time?

Elapsed Time

End Time



6.

Start Time?

Elapsed Time

End Time



ANSWER KEY

4.


Start Time?

11:40

Elapsed Time

9:00

End Time



5.


Start Time?

12:00

Elapsed Time

7:00

End Time



6.

Start Time?

10:00

Elapsed Time

3:00

End Time

